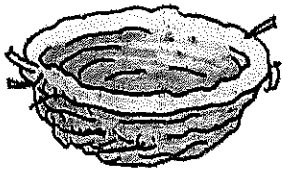








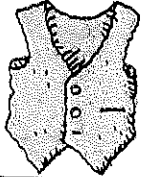




REVIEW

Write the letters that complete each picture name. Then trace the whole word.

st nt lt ft ld mp nd

<p>1</p>  <p>nest</p>	<p>2</p>  <p>la</p>	<p>3</p>  <p>te</p>
<p>4</p>  <p>co</p>	<p>5</p>  <p>gi</p>	<p>6</p>  <p>ha</p>
<p>7</p>  <p>be</p>	<p>8</p>  <p>ju</p>	<p>9</p>  <p>pla</p>
<p>10</p>  <p>ve</p>	<p>11</p>  <p>po</p>	<p>12</p>  <p>qui</p>

Name _____

Telling and Asking Sentences

Write the sentences correctly.

1. the girls are home

2. were you late

3. did you eat yet

4. where is the book

5. sam is my friend

Copyright © 1986 by Harcourt Brace Jovanovich, Inc.
All rights reserved.

Name _____

① the billy goat wants to cross the bridge.

TROLL BRIDGE • LEVEL G • 3

② my teacher, mrs. hale, likes the story.

③ the troll's name is oscar.


④ do you know what i like?

⑤ the goat lives in california.

SKILL: CAPITALIZATION

Instructions: Have students rewrite the sentences using capital letters correctly.

A Fun Job




Mom can fix clocks.






Ben can help Mom.

2



A man comes in.
Can Mom fix his clock?



Mom and Ben fix it!

Name _____


A. Reread "A Fun Job."

Write C if the sentence and picture tell about a character.


Write S if the sentence and picture tell about a setting.

Write E if the sentence and picture tell about an event.


1. This is Ben.



2. This is the shop.



3. Mom and Ben fix the clock.



Name: _____

Comparing Numbers

"Greater Than"

$$45 > 41$$

45 is greater than 41

"Equal To"

$$63 = 63$$

63 is equal to 63

"Less Than"

$$33 < 42$$

33 is less than 42

In the left column, write a symbol (<, >, or =) for each.

In the right column, write the words "is greater than", "is less than", or "is equal to."

a. 19 _____ 25

19 _____ 25

b. 32 _____ 27

32 _____ 27

c. 7 _____ 17

7 _____ 17

d. 47 _____ 47

47 _____ 47

e. 85 _____ 36


85 _____ 36

Challenge:

★ 2 + 3 _____ 7

2 + 3 _____ 7

0~100



> Greater Than
Less Than

or

Equal To



Write in the symbol that makes the problem true.

>, < or =

1. 35 <input type="text"/> 52	2. 40 <input type="text"/> 74	3. 45 <input type="text"/> 30
4. 84 <input type="text"/> 77	5. 38 <input type="text"/> 64	6. 51 <input type="text"/> 39
7. 43 <input type="text"/> 43	8. 79 <input type="text"/> 28	9. 99 <input type="text"/> 89
10. 23 <input type="text"/> 22	11. 66 <input type="text"/> 77	12. 6 <input type="text"/> 16
13. 98 <input type="text"/> 89	14. 18 <input type="text"/> 18	15. 30 <input type="text"/> 49

Name: _____

Ordering Numbers: 2-Digit

Ordering Numbers

Rewrite each list of numbers in order, from least to greatest.

a.

15	21	12	18
----	----	----	----

 _____, _____, _____, _____

b.

56	71	47	50
----	----	----	----

 _____, _____, _____, _____

c.

36	6	37	31
----	---	----	----

 _____, _____, _____, _____

d.

88	81	98	18
----	----	----	----

 _____, _____, _____, _____

e.

39	48	45	41
----	----	----	----

 _____, _____, _____, _____

f.

44	22	42	24
----	----	----	----

 _____, _____, _____, _____

- ❖ In the box below, write four numbers. Have a friend rewrite them in order from least to greatest.

--

 _____, _____, _____, _____

Number Order Practice

Name _____ Date _____

Write the missing numbers.

71	72		75			79	
81			84		87		90
		93		96		98	

Write the missing numbers.

4. 53 _____ 20 36 _____ 38 49 _____

5. _____ 31 87 _____ 12 _____ 14 _____ 75

Write \lt or \gt to complete each sentence.

6. 79 _____ 80 65 _____ 56 41 _____ 38 27 _____ 72

7. 32 _____ 23 87 _____ 90 80 _____ 70 55 _____ 52

Solve the riddles. Write the numbers.

8. I am an odd number between 40 and 50. You say me when you count by 5's. What number am I?

9. I am an even number greater than 89 and less than 93. You say me when you count by 10's. What number am I?