





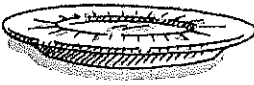


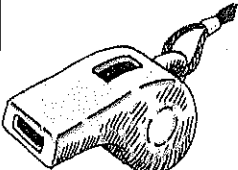




Name _____



Circle and write the letters that complete each picture name. Then trace the whole word.

<p>1</p>  <p>ch sh wh</p> <p>ee p</p>	<p>2</p>  <p>wh sh qu</p> <p>a le</p>	<p>3</p>  <p>wh th sh</p> <p>ea</p>
<p>4</p>  <p>th wh ch</p> <p>ee l</p>	<p>5</p>  <p>ch th sh</p> <p>oe</p>	<p>6</p>  <p>ch sh qu</p> <p>ip</p>
<p>7</p>  <p>sh wh th</p> <p>di</p>	<p>8</p>  <p>wh ch qu</p> <p>ite</p>	<p>9</p>  <p>ch wh sh</p> <p>elf</p>
<p>10</p>  <p>th wh qu</p> <p>istle</p>	<p>11</p>  <p>sh wh th</p> <p>ave</p>	<p>12</p>  <p>wh th sh</p> <p>irt</p>

Nouns

Directions: Write these naming words in the correct box.

store
cat

zoo
park

child
gym


baby
woman

teacher
sock


table
horse



Person




Place




Thing

Life Long Ago



What was life like long ago?
What did boys and girls do?
They helped a lot at home.






Girls helped make clothes.
Boys helped to plant.

②



Boys and girls fed the hens.
They looked for eggs.



Boys and girls still had time
to play. They had fun just
like you do!

Name _____

Reread “Life Long Ago.” Read the questions that compare and contrast what boys and girls did. Circle the words that answer each question. Write the words.



1. The boys and girls all _____.

helped planted

2. What did girls do?

Girls helped to _____.

make clothes read

3. What did boys do?

Boys helped to _____.

sew plant

4. Boys and girls fed the _____.


plants hens

Name: _____

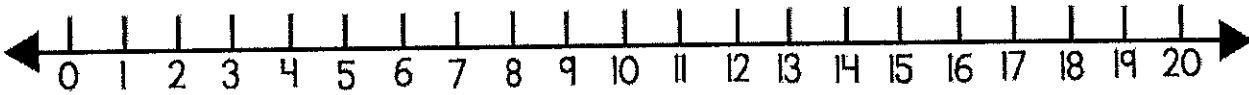
Date: _____



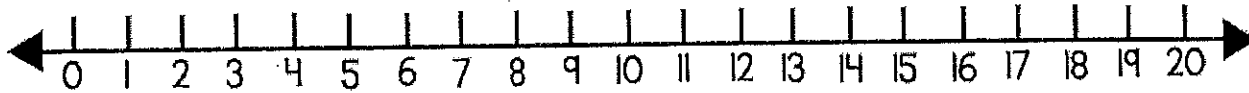
Winter Addition



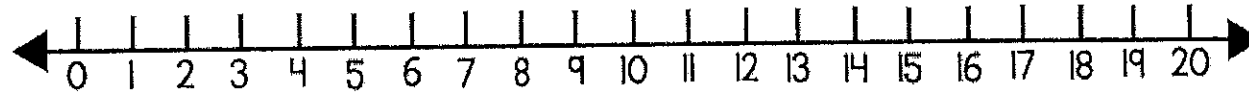
$$6 + 5 + 2 = \underline{\quad}$$



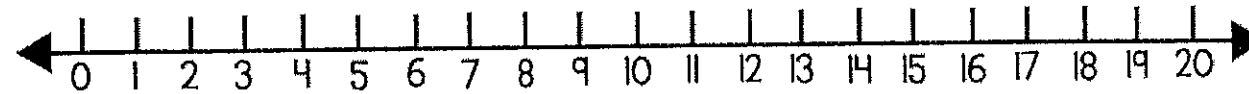
$$7 + 5 + 3 = \underline{\quad}$$



$$9 + 3 + 1 = \underline{\quad}$$




$$6 + 3 + 4 = \underline{\quad}$$



Name: _____

Addition Word Problems



Answer the questions. Show your work.

1. Leah sees 14 birds.
Abby sees 23 birds.
How many birds did they see in all?

Answer: _____

2. Dan has 27 pencils.
He buys 21 more.
How many pencils does he have in all?

Answer: _____

3. Pam has 33 keys.
She finds 4 more.
How many keys does she have now?

Answer: _____

4. Ted picks 27 apples.
Pat picks 40 apples.
How many apples do they have in all?

Answer: _____

Name: _____

Odd or Even?

Odd numbers end with these digits: 1, 3, 5, 7, or 9

Even numbers end with these digits: 0, 2, 4, 6, or 8

Directions: Tell whether each number is odd or even.

- | | | | |
|--------|-------|----------|-------|
| a. 6 | _____ | b. 36 | _____ |
| c. 23 | _____ | d. 74 | _____ |
| e. 54 | _____ | f. 0 | _____ |
| g. 98 | _____ | h. 952 | _____ |
| i. 100 | _____ | j. 500 | _____ |
| k. 41 | _____ | l. 67 | _____ |
| m. 20 | _____ | n. 89 | _____ |
| o. 72 | _____ | p. 58 | _____ |
| q. 41 | _____ | r. 714 | _____ |
| s. 9 | _____ | t. 1,378 | _____ |

An apple tree has 62 apples on it.

Are there an odd or even number of apples on the tree? _____

Samantha has 17 cookies.

Does she have an odd or even number of cookies? _____

Is the sum of $7+3$ odd or even? _____

Name _____

$4+4=$ _

$2+2=$ _

$3+3=$ _

$8+8=$ _

$0+0=$ _

$8+8=$ _

$3+3=$ _

$5+5=$ _

$1+1=$ _

$6+6=$ _

$0+0=$ _

$6+6=$ _

$1+1=$ _

$5+5=$ _

$2+2=$ _

$7+7=$ _

$0+0=$ _

$9+9=$ _

$9+9=$ _

$1+1=$ _

$4+4=$ _

$7+7=$ _

$8+8=$ _

