


Write the word that names each picture.

NTI DAY #8

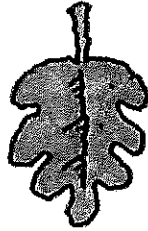
13th Day Missed

cake leaf bee feet rain game read tray mail


1



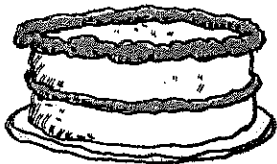
2



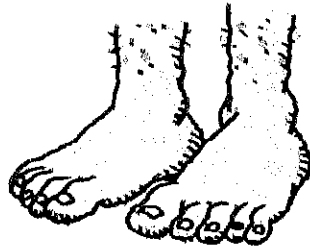
3



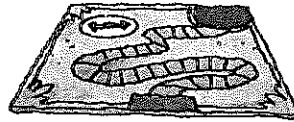
4




5



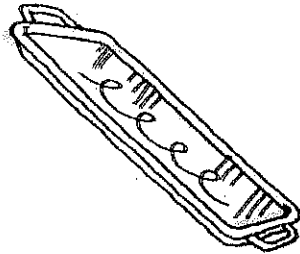
6




7



8




9



Name: _____

Date: _____

Skill: Alphabetical Order (First Letter)



Put these words in alphabetical order:

some think of her as round

1. _____

2. _____

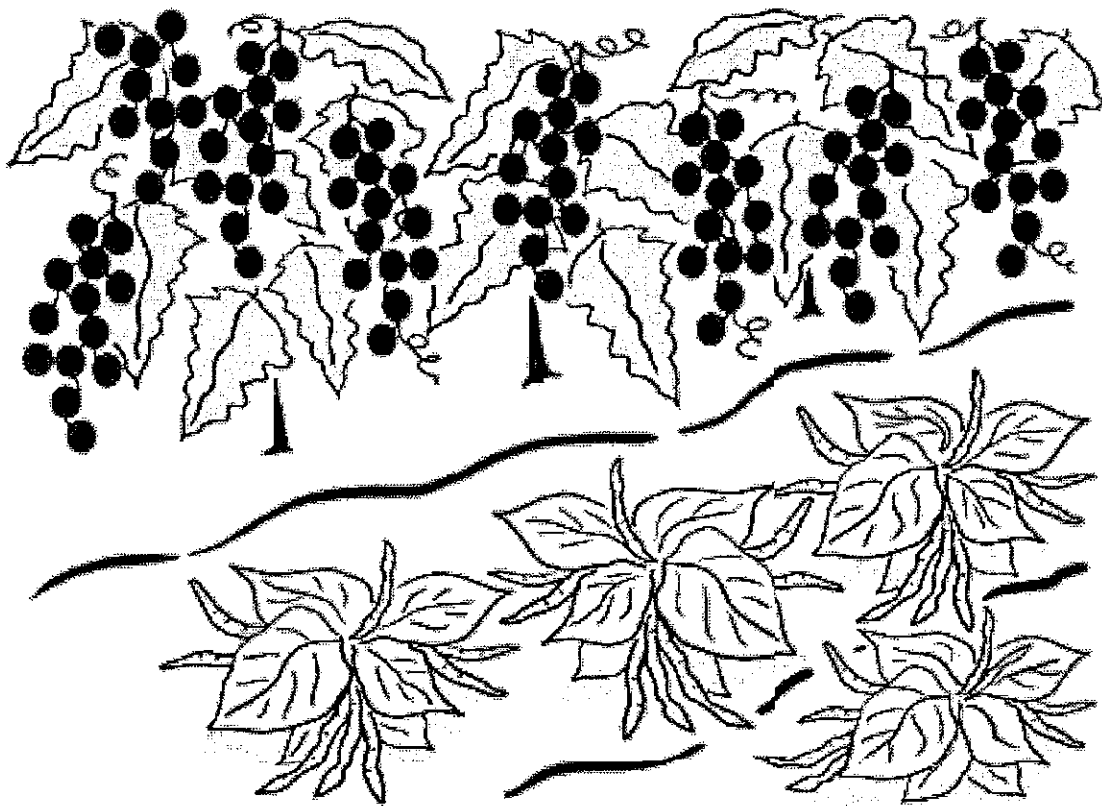
3. _____

4. _____

5. _____

6. _____

The Food We Eat



This is a big farm.
It grows beans and grapes.
Soon they can be picked.





People work here. They
pack up the food. Then
trucks take it to shops.

②



After that, we go to a shop. We buy the grapes. They look good!



Then we buy beans.
We cook the food.
It tastes good!

Name _____

A. Reread “The Food We Eat.” Think about what happens to the food at each stage. Answer the questions.

1. What happens to the food first?

2. After packing, what happens to the food then?

3. What happens to the food next?

4. What happens to the food last?

B. Complete the sentence to tell what the family buys.

5. The family buys

Name: _____

Fact Family Street

Use addition and subtraction to fill in the fact family living in each house.

a.

14
+, -
10 4

10	+	4	=	14
4	+	10	=	14
14	-	10	=	4
14	-	4	=	10

b.

16
+, -
11 5

	+		=	
	+		=	
	-		=	
	-		=	

c.

11
+, -
7 4

	+		=	
	+		=	
	-		=	
	-		=	

d.

11
+, -
6 5

	+		=	
	+		=	
	-		=	
	-		=	

e.

15
+, -
12 3

	+		=	
	+		=	
	-		=	
	-		=	

f.

14
+, -
8 6

	+		=	
	+		=	
	-		=	
	-		=	

g.

17
+, -
10 7

	+		=	
	+		=	
	-		=	
	-		=	

h.

14
+, -
9 5

	+		=	
	+		=	
	-		=	
	-		=	

i.

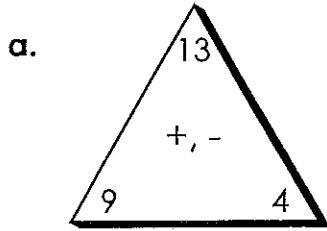
21
+, -
12 9

	+		=	
	+		=	
	-		=	
	-		=	

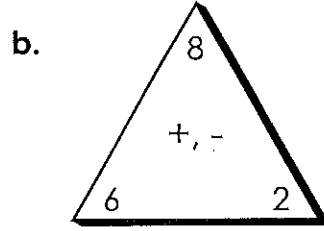
Name: _____

Fact Families

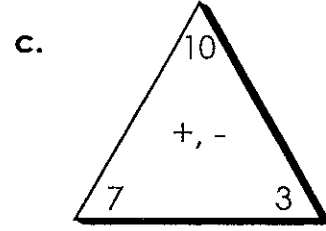
Use addition and subtraction to write the fact family for each.



$$\begin{array}{r} _ + _ = _ \\ _ + _ = _ \\ _ - _ = _ \\ _ - _ = _ \end{array}$$

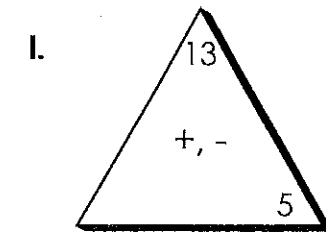
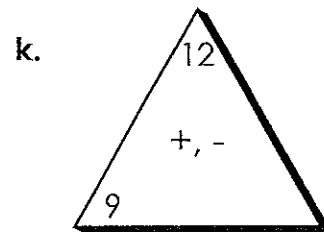
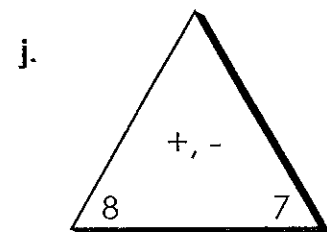
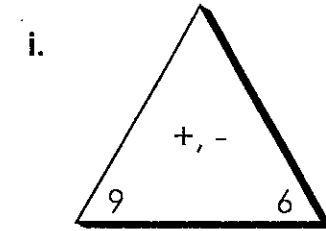
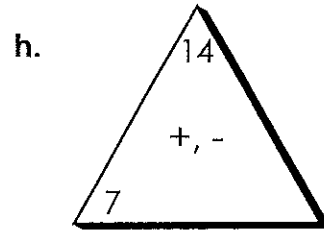
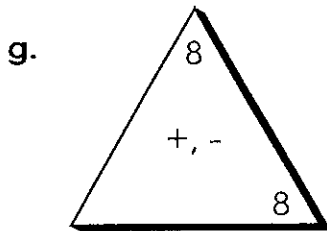
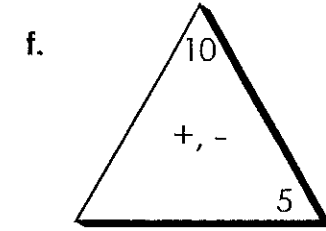
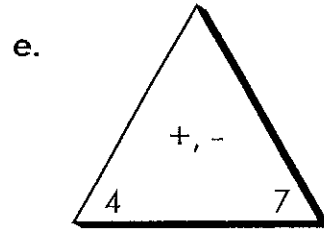
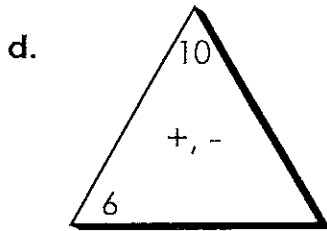


$$\begin{array}{r} _ + _ = _ \\ _ + _ = _ \\ _ - _ = _ \\ _ - _ = _ \end{array}$$



$$\begin{array}{r} _ + _ = _ \\ _ + _ = _ \\ _ - _ = _ \\ _ - _ = _ \end{array}$$

Use addition and subtraction to fill in the missing fact in each family.



Name: _____

Fact Families

Use addition or subtraction to fill in the missing number of each number bond.

example:

Whole	Part
8	6
	Part
	2

a.

Part	Whole
9	18
Part	

b.

Whole	
Part	Part
6	7

c.

Part	Part
	5
Whole	
18	

d.

Part	Part
4	5
Whole	

e.

Whole	Part
17	
	Part
	9

f.

Part	Whole
3	12
Part	

g.

Whole	
15	
Part	Part
	5

h.

Whole	
Part	Part
8	0

i.

Part	Part
	8
Whole	
15	

j.

Whole	Part
13	4
	Part

k.

Part	Whole
7	
Part	
5	

l.

Part	Whole
9	14
Part	

m.

Whole	
Part	Part
9	6

n.

Part	Part
	8
Whole	
12	

o.

Whole	Part
11	6
	Part

TRUE or FALSE

Solve each side of the equation. Write the answer then color in the true or false.

Name _____

$3+2=1+5$

_____ = _____

Are the numbers the same?

Yes



True

No



False

$6+1=3+3$

_____ = _____

Are the numbers the same?

Yes



True

No



False

$4+2=1+5$

_____ = _____

Are the numbers the same?

Yes



True

No



False

$1+3=2+2$

_____ = _____

Are the numbers the same?

Yes



True

No



False

$4+1=5+0$

_____ = _____

Are the numbers the same?

Yes



True

No



False

$2+5=1+3$

_____ = _____

Are the numbers the same?

Yes



True

No



False