

Write the word that names each picture.

NTI DAY #10

15th Day Missed

kite
note




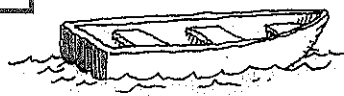


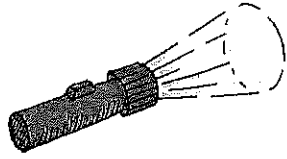



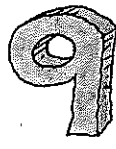

hose
gold

road
find

night
hi

rope
light

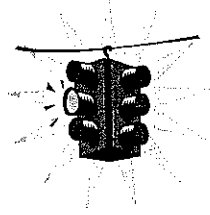
nine
boat

<p>1</p>  <p>_____</p> <p>_____</p> <p>_____</p>	<p>2</p>  <p>_____</p> <p>_____</p> <p>_____</p>	<p>3</p>  <p>_____</p> <p>_____</p> <p>_____</p>
<p>4</p>  <p>_____</p> <p>_____</p> <p>_____</p>	<p>5</p>  <p>_____</p> <p>_____</p> <p>_____</p>	<p>6</p>  <p>_____</p> <p>_____</p> <p>_____</p>
<p>7</p>  <p>_____</p> <p>_____</p> <p>_____</p>	<p>8</p>  <p>_____</p> <p>_____</p> <p>_____</p>	<p>9</p>  <p>_____</p> <p>_____</p> <p>_____</p>
<p>10</p>  <p>_____</p> <p>_____</p> <p>_____</p>	<p>11</p>  <p>_____</p> <p>_____</p> <p>_____</p>	<p>12</p>  <p>_____</p> <p>_____</p> <p>_____</p>

Name: _____

Date: _____

Skill: Alphabetical Order (First Letter)



Put these words in alphabetical order:

after	every	stop	you	may	go
-------	-------	------	-----	-----	----

1. _____


2. _____

3. _____

4. _____

5. _____


6. _____



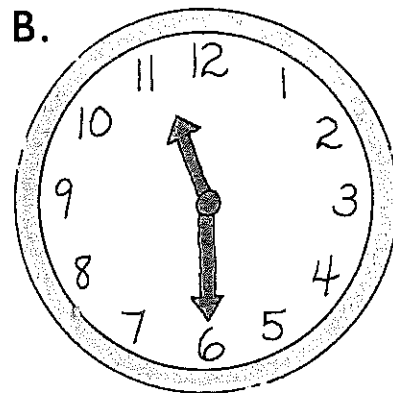
When the minute hand goes halfway around the clock from 12 to 6, we say it is half past the hour.

The minute hand is on the 6 and the hour hand is halfway between 1 and 2. The time is half past 1 or 1:30.

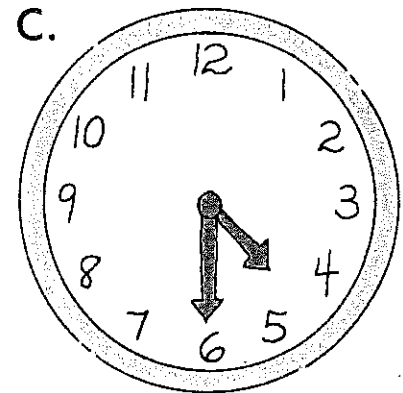
◆ Write the time on the lines.



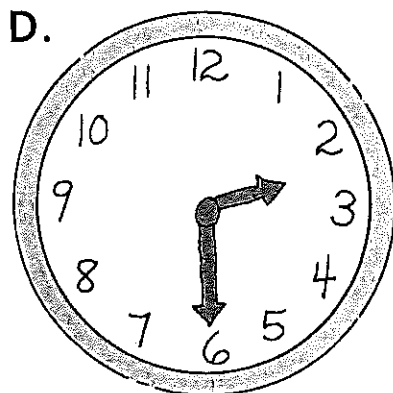
half past _____
_____:




half past _____
_____:




half past _____
_____:



half past _____
_____:





half past _____
_____:



half past _____
_____:

Picture Graphs and Story Problems




- How many pets does Dan have? _____
- How many pets does Ann have? _____
- How many pets does Lisa have? _____
- How many pets does Nick have? _____
- How many pets do Carol and Pete have in all?

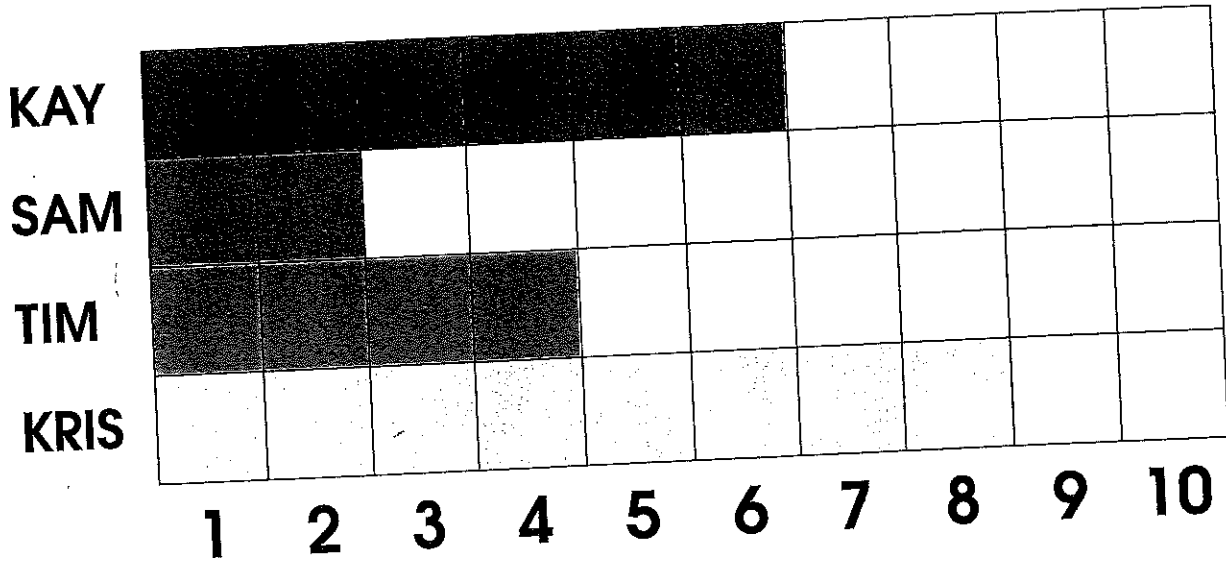
$$\square = \underline{\hspace{2cm}}$$

- Nick has more pets than Dan.
How many more pets does Nick have?

$$\square = \underline{\hspace{2cm}}$$



Bar Graphs and Story Problems



1. How many boxes of cookies did Kay sell? _____

2. How many boxes of cookies did Tim sell? _____

3. How many boxes of cookies did Tim and Sam sell altogether?

_____ _____ = _____

4. How many did Kris and Sam sell altogether?

_____ _____ = _____

5. Kris sold more boxes than Tim. How many more did Kris sell?

_____ _____ = _____

6. How many boxes did Tim and Kay sell in all?

_____ _____ = _____

